

October Maths Challenge

Choose a challenge to solve –
Can you solve more than one?

Challenge # 1

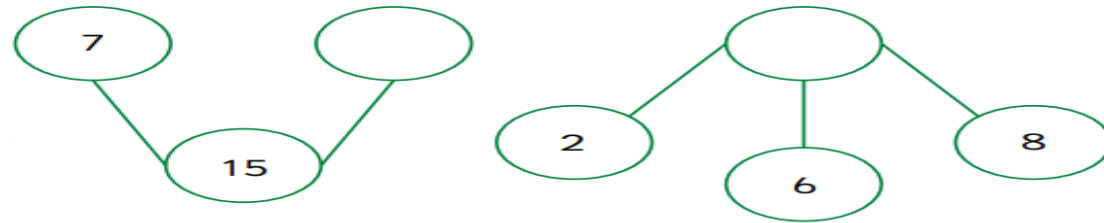
How many teddies are there?



There are _____ teddies.


Challenge # 3

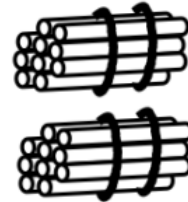
Complete the part-whole models.

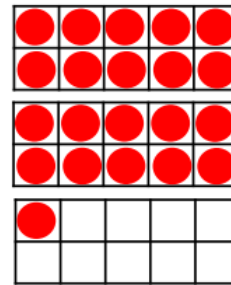


Challenge # 2

Tick the image that shows one more than 21.







Creative Challenge

Can you make the following numbers using bundles of 10 sticks and loose sticks?

11

14

18

15



You can collect and use your own sticks or you can draw them!

Can you think of your own number to make?